






Year 6 Task 3

Have a look at the table below on note values. The information on this table will help guide you through the next two exercises.

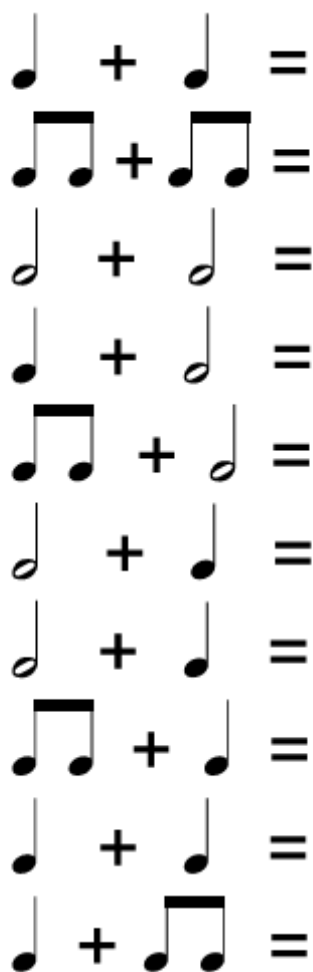
Note Values

Draw the note	Name the note length	How many beats does it last?
	Semibreve	4 (or the whole bar)
	Minim	2
	Crotchet	1
	Quaver	$\frac{1}{2}$
	Semi quaver	$\frac{1}{4}$

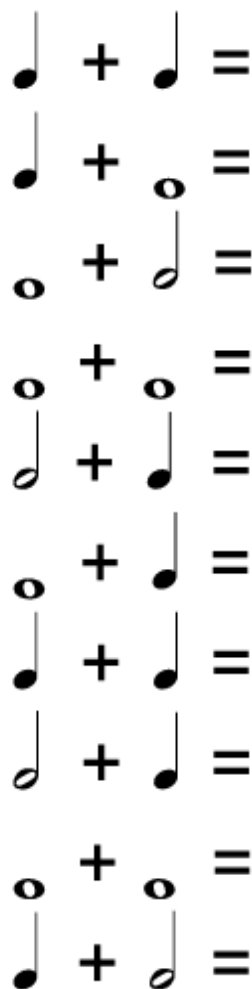
Notes Values exercise 1

Draw the note	Name the note length	How many beats does it last?

Exercise 2



Score: _____ of 10



Score: _____ of 10